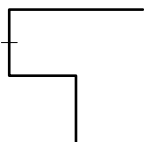
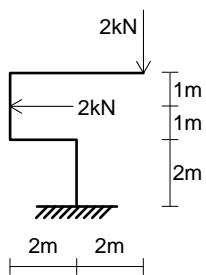


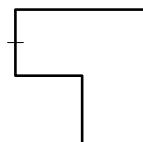
・建築構造力学 I A ・同演習 第7回 演習問題 実施日2010/06/09	学生証 番号		氏名		得点

軸力図 (AFD)、せん断力図 (SFD)、曲げモーメント図 (BMD) を図中に描きなさい。

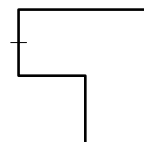
(1)



AFD

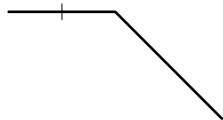
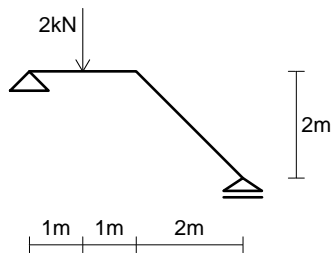


SFD

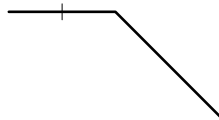


BMD

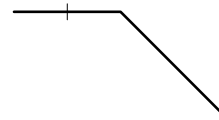
(2)



AFD



SFD



BMD