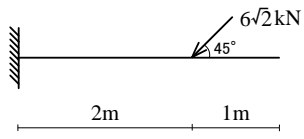


建築構造力学 I A・同演習 ・中間試験 実施日2010/06/09	学生証 番号		氏名	得点

軸力図 (AFD)、せん断力図 (SFD)、曲げモーメント図 (BMD) を図中に描きなさい。

(1)



AFD

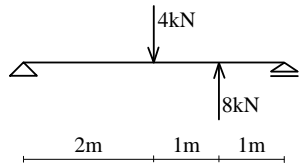


SFD




BMD


(2)



AFD

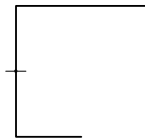
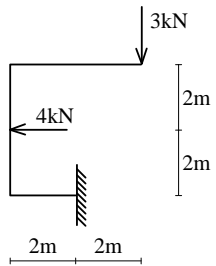


SFD

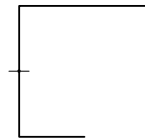


BMD

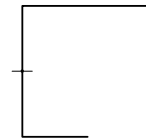
(3)



AFD

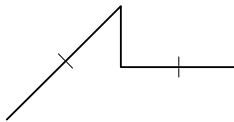
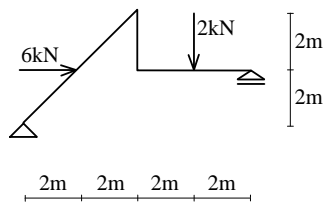


SFD

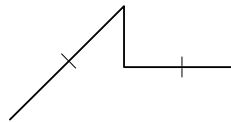


BMD

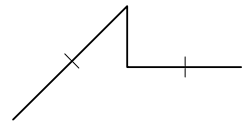
(4)



AFD



SFD



BMD