
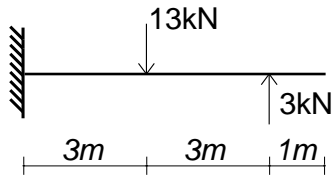



建築構造力学1A・同演習 第2回 中間試験 実施日2012/06/20	学生証 番号	氏名	得点

軸力図 (AFD)、せん断力図 (SFD)、曲げモーメント図 (BMD) を図中に描きなさい。
 ただし各断面力が部材内ですべて0の場合は、0を図に書きなさい。


(1)



AFD


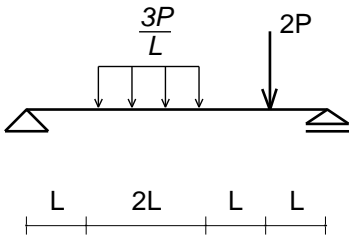


SFD




BMD


(2)



AFD

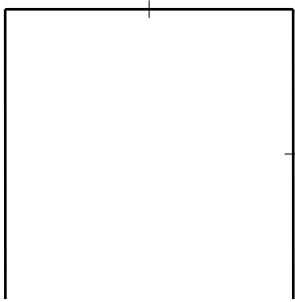
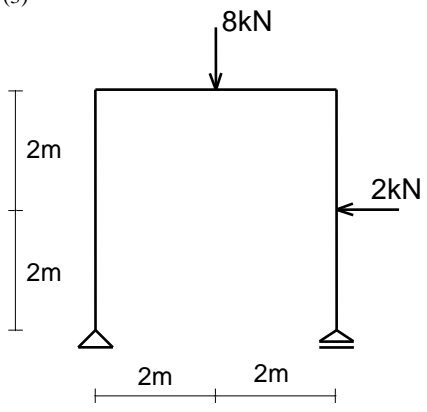


SFD

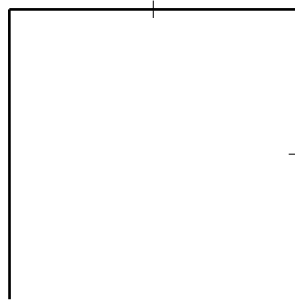


BMD

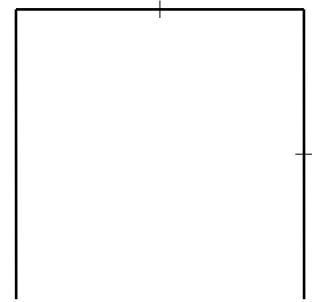
(3)



AFD


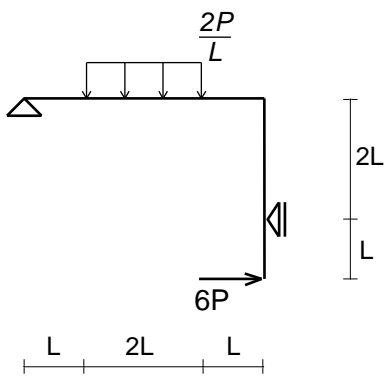


SFD




BMD

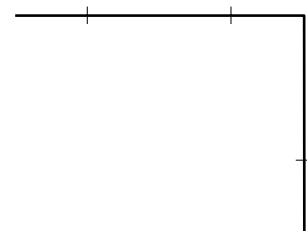
(4)



AFD



SFD



BMD