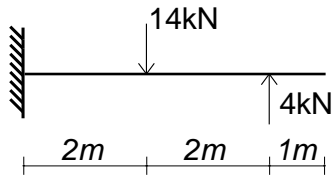


建築構造力学 Ia・同演習 第2回 中間試験 実施日2012/06/20	学生証 番号		氏名		得点

軸力図 (AFD)、せん断力図 (SFD)、曲げモーメント図 (BMD) を図中に描きなさい。
 ただし各断面力が部材内ですべて 0 の場合は、0 を図に書きなさい。

(1)



AFD


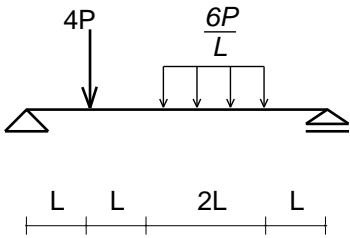


SFD




BMD


(2)



AFD

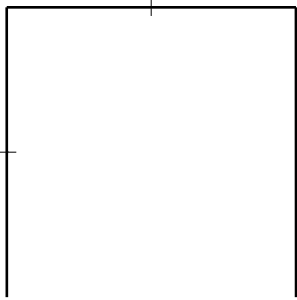
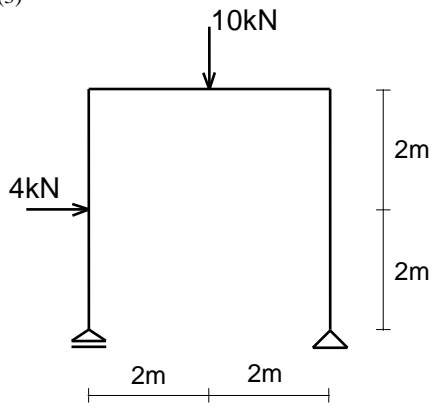


SFD

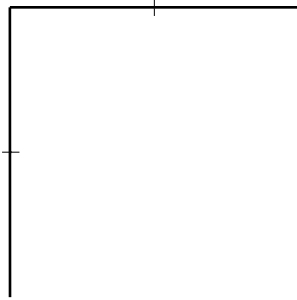


BMD

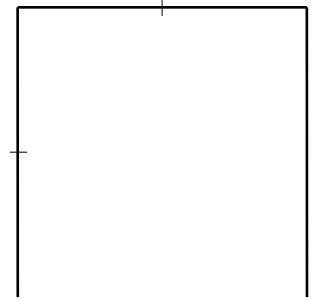
(3)



AFD

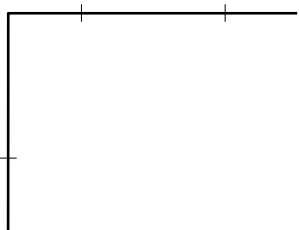
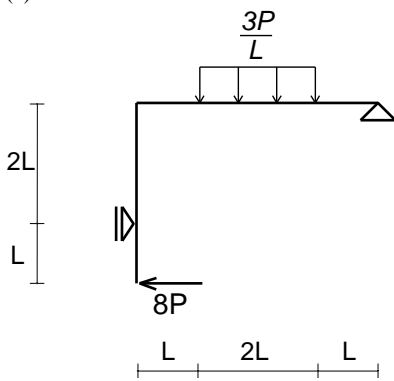


SFD

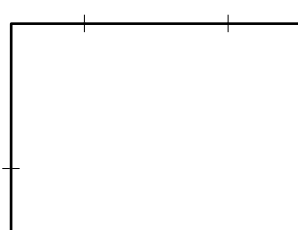


BMD

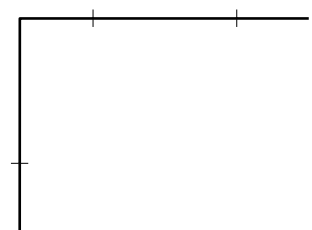
(4)



AFD



SFD



BMD