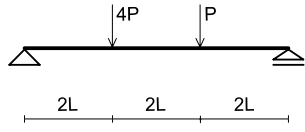


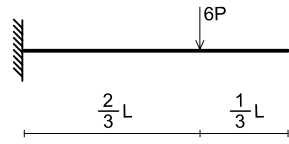
建築構造力学 I A・同演習 第3回 演習問題 実施日2012/05/02	学生証 番号	氏名	得点

問1 反力を求め、力の釣合状態を図示しなさい。

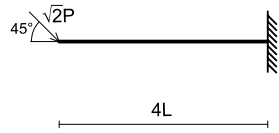
(1)



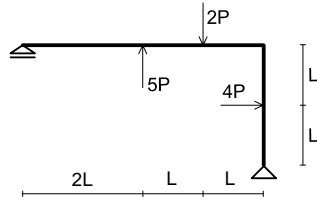
(2)



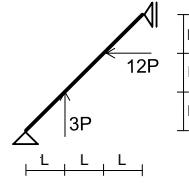
(3)



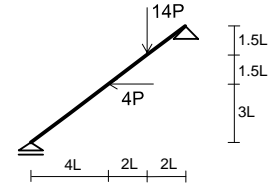
(4)



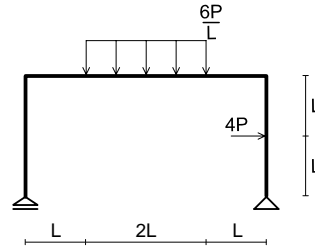
(5)



(6)



(7)



(8)

