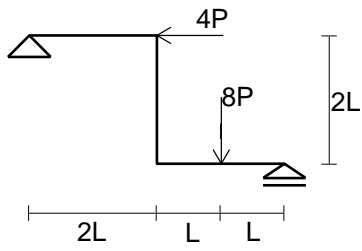


| | | | | |
|---|-----------|--|----|----|
| 建築構造力学 I A・同演習 第7回 演習問題 実施日2012/06/13 | 学生証 番号 | | 氏名 | 得点 |
| | | | | |

軸力図 (AFD)、せん断力図 (SFD)、曲げモーメント図 (BMD) を図中に描きなさい。

(1)

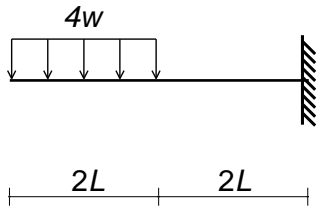


AFD

SFD

BMD

(2)

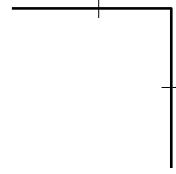
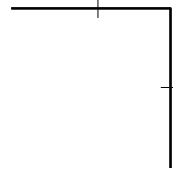
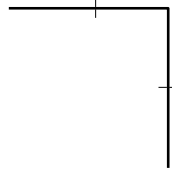
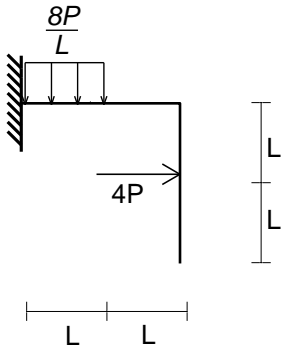


AFD

SFD

BMD

(3)




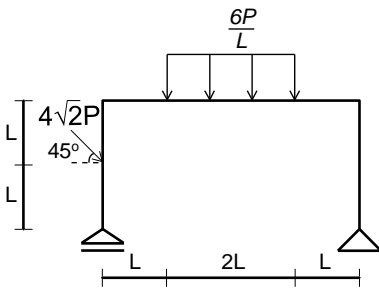


AFD

SFD

BMD

(4)



AFD

SFD

BMD