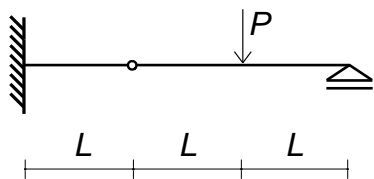


建築構造力学 I A・同演習 第9回 演習問題 実施日2012/06/27	学生証 番号		氏名	得点

問1. 軸力図(AFD)、せん断力図(SFD)、曲げモーメント図(BMD) を描きなさい。

(1)



AFD

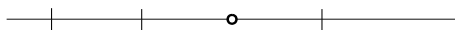
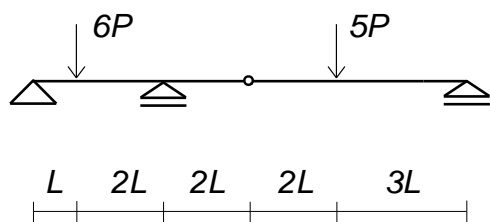


SFD

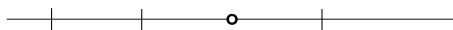


BMD

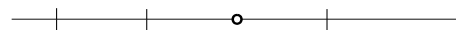
(2)



AFD

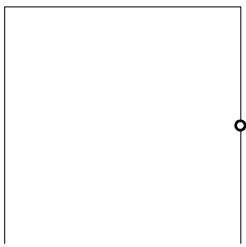
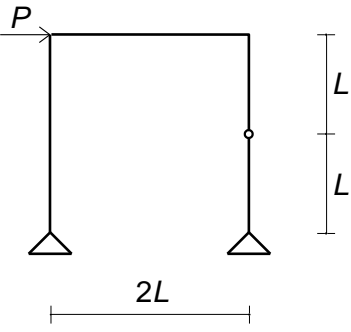


SFD




BMD


(3)



AFD

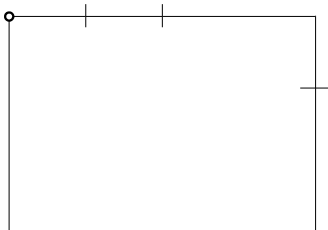
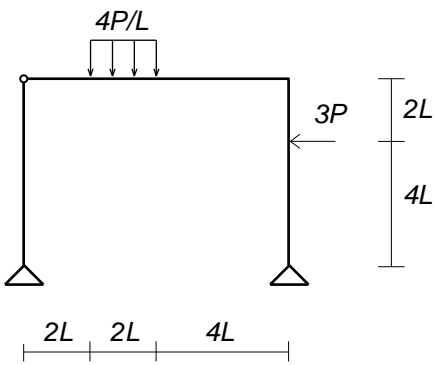


SFD

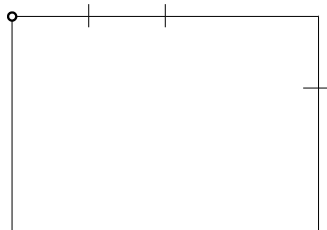


BMD

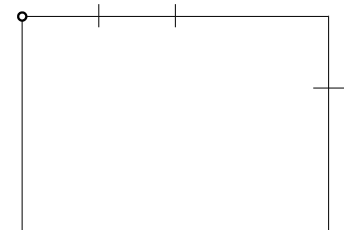
(4)



AFD



SFD



BMD